

Tennessee Summer Planning Materials: Print Pack

Rising Grade 1
Week 2
Lesson 3

Activity #2 Concept Development


Name _____ Date _____

There are 4 snakes sitting on the rocks. 2 more snakes slither over. How many snakes are on the rocks now? Put a box around all the snakes, trace the mystery box, and write the answer inside it.



$$4 + 2 = \square$$

There are 5 turtles swimming. Draw 2 more turtles that come to swim. How many turtles are swimming now? Draw a box around all the turtles, draw a mystery box, and write the answer.




$$5 + 2 =$$

Today is your birthday! You have 7 presents. A friend brings another present. Draw the present. How many presents are there now? Draw a mystery box, and write the answer inside it.



$$7 + 1 =$$

Listen and draw. There were 6 girls playing soccer. A boy came to play. How many children were playing soccer then? Draw a box around all the children.



6

+

1

=



Listen and draw. There were 3 frogs on a log. 5 more frogs hopped onto the log. How many frogs were on the log then? Draw a box around the frogs, and box the answer.



3

+

5


=

Exit Ticket

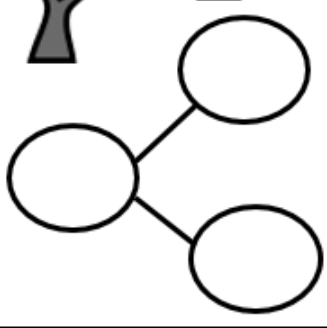
Name _____ Date _____




There are 8 trees. 5 are palm trees, and 3 are apple trees. Fill in the number sentences and the number bond.



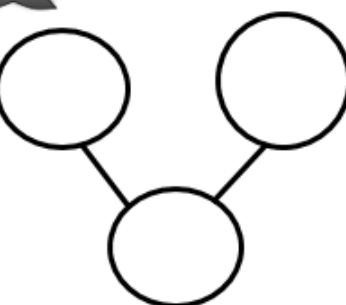
$\square = \square + \square$
 $\square + \square = \square$




There are 8 trees. 4 are oak trees, and 4 are spruce trees. Fill in the number sentences and the number bond.



$\square = \square + \square$
 $\square + \square = \square$



Additional Practice

Name _____ Date _____



There are 3 penguins on the ice.
4 more penguins are coming.
How many penguins are there?

$$3 + 4 = \boxed{}$$



There is 1 mama bear. 5 baby
bears are following her. How many
bears are there? Draw a box for
the answer.

$$1 + 5 = \phantom{\boxed{}}$$

Draw 7 balls in the ball box. Draw a girl putting 1 more ball in the ball
box. Circle all the balls, and draw a box for the answer. Write your
answer.



$$7 + 1 = \phantom{\boxed{}}$$