

Tennessee Summer Planning Materials: Print Pack




Rising Grade 1
Week 2
Lesson 1

Activity #2 Concept Development

Problem Set

Name _____

Date _____

| | | |
|--|--|---|
| <p>Draw a tower with more cubes. _____ is more than _____.</p>  | <p>Draw a train with fewer cubes. _____ is less than _____.</p>  | <p>Draw a tower with more cubes. _____ is more than _____.</p>  |
|--|--|---|

Draw a train. Draw another train with fewer cubes.
_____ is more than _____. _____ is less than _____.

Name _____

Date _____

Roll a die, and draw a set of objects to match the number rolled.
Write the number in the box. Roll the die again, and do the same in the
next box. Use the words *more than* to compare the numbers.

| | |
|--|----------------------|
| | <input type="text"/> |
| | <input type="text"/> |

_____ is more than _____.

| | |
|--|----------------------|
| | <input type="text"/> |
| | <input type="text"/> |

_____ is more than _____.


| | |
|--|----------------------|
| | <input type="text"/> |
| | <input type="text"/> |

_____ is more than _____.

Additional Practice

Name _____


Date _____

| | |
|--|--|
| |  |
|--|--|

Draw a train with more cubes.

_____ is more than _____.

_____ is less than _____.



On the back, draw a tower. Draw another tower that has more cubes.

_____ is more than _____. _____ is less than _____.